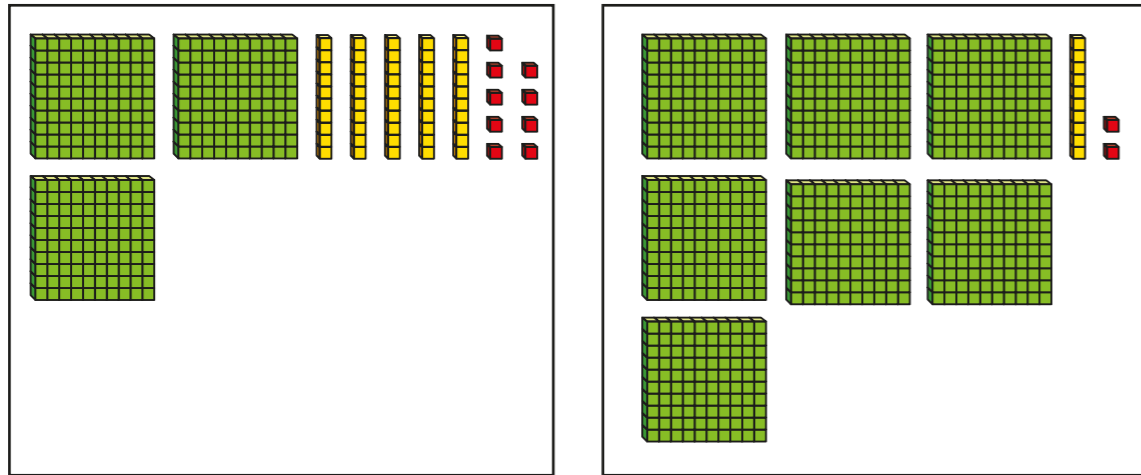


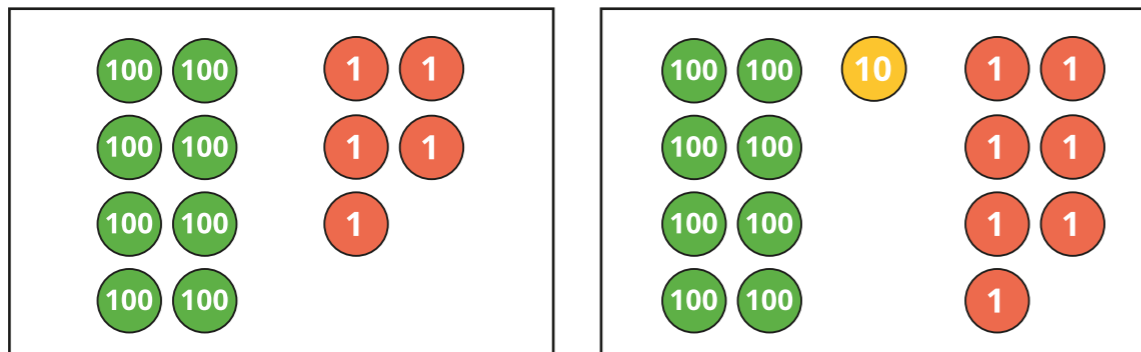
Compare numbers to 1,000



1 Which number is smaller? Tick your answer.



2 Which number is greater? Tick your answer.



3 Tick the greater number.

H	T	O

4 Circle all the numbers that are greater than 350

700 396 299 167 342 400

5 Circle all the numbers that are less than 718

634 800 715 720 66 1,000

6 Write $>$, $<$ or $=$ to make the statements correct.

a)

100s	10s	1s
2	9	5

○

100s	10s	1s
3	7	2

b)

100s	10s	1s
4	0	1

○

100s	10s	1s
4	2	6

c)

100s	10s	1s
2	5	7

○

d) Which place value columns did you have to compare in part c)?

7 Write the missing phrase.

is less than

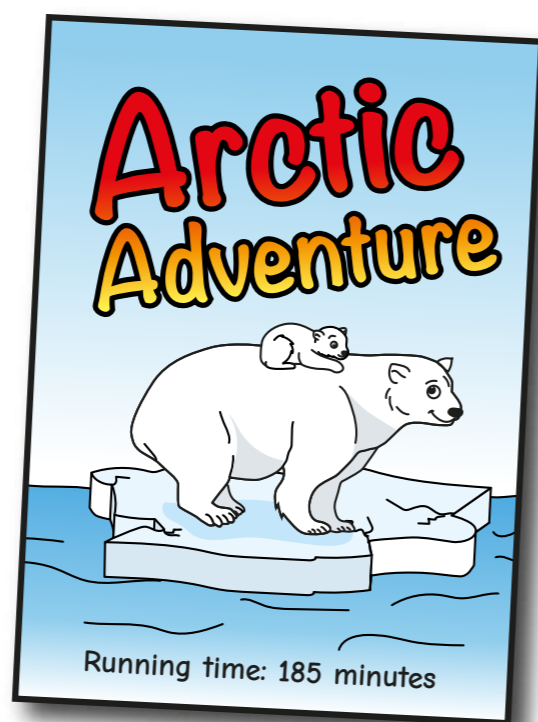
is greater than

a) 328 _____ 344

b) 916 _____ 490

c) 510 _____ 517

8 There are two films on at the cinema.



Which film lasts longer?

_____ lasts longer.

9 Write $<$, $>$ or $=$ to make the statements correct.

a) $176 \bigcirc 281$

e) $1,000 \bigcirc 699$

b) $397 \bigcirc 452$

f) $820 \bigcirc 90$

c) $757 \bigcirc 747$

g) $392 \bigcirc 300 + 90 + 2$

d) $812 \bigcirc 810$

h) $392 \bigcirc 300 + 90 + 3$

10 What could the missing digits be?

a) 621 is greater than $_24$

b) $500 < _54$

621 is greater than 6_4

$500 < 5_2$

621 is greater than $62_$

$500 < 53_$

11 Write all the possible missing digits.

a) 778 is less than 7_4

b) 778 is less than 7_9

c) 778 is less than $77_$
